



Name: \_\_\_\_\_ Class: \_\_\_\_\_ Class no.: \_\_\_\_\_ Date: \_\_\_\_\_

**A. Fisheries Hall**

~~DWFKWKHSKWFKWKHFRUHFWHFULSWLQ~~

Wholesale Fish  
Market



Traditional Wooden  
Fishing Vessel







## B. Agriculture Hall


Try to find out which vegetables do the children like from the route map below.


Chinese White Cabbage    Lettuce    Chinese Kale    Flowering Chinese Cabbage



 Joseph likes  
\_\_\_\_\_

 Fanny likes  
\_\_\_\_\_

 Jack likes  
\_\_\_\_\_

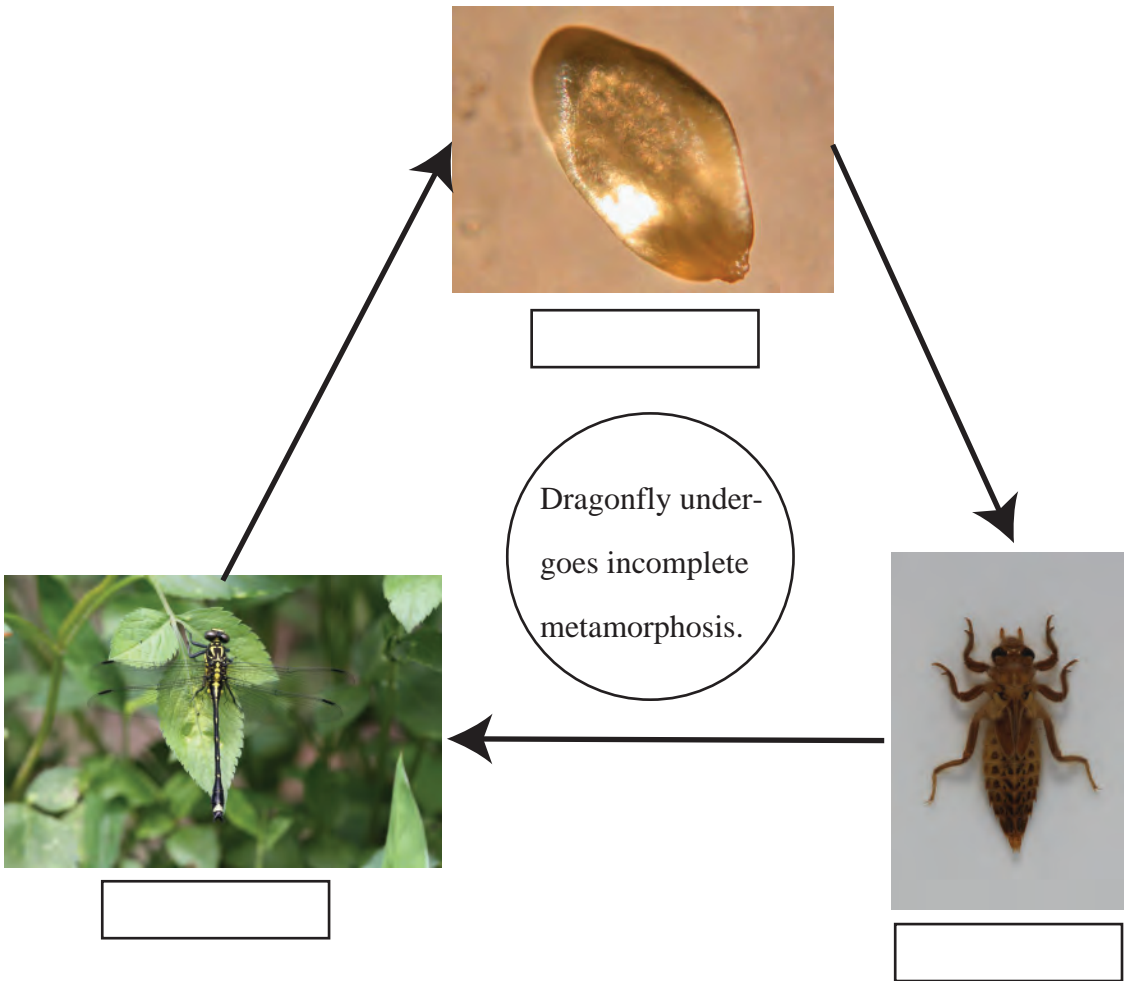
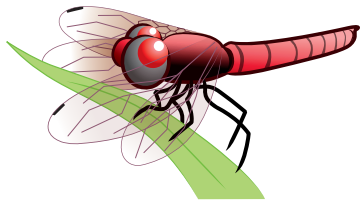
 Walter likes  
\_\_\_\_\_



### C. Insectarium

Dragonfly has an incomplete life cycle which involves three stages. Could you name the three stages of my life cycle in the boxes below?

Hints:      Egg      Larva      Adult





Butterfly has a complete life cycle which involves four stages. Could you name the four stages of my life cycle in the boxes below?

**Hints: Pupa Larva Egg Adult**



Butterfly under-  
goes complete  
metamorphosis.

